



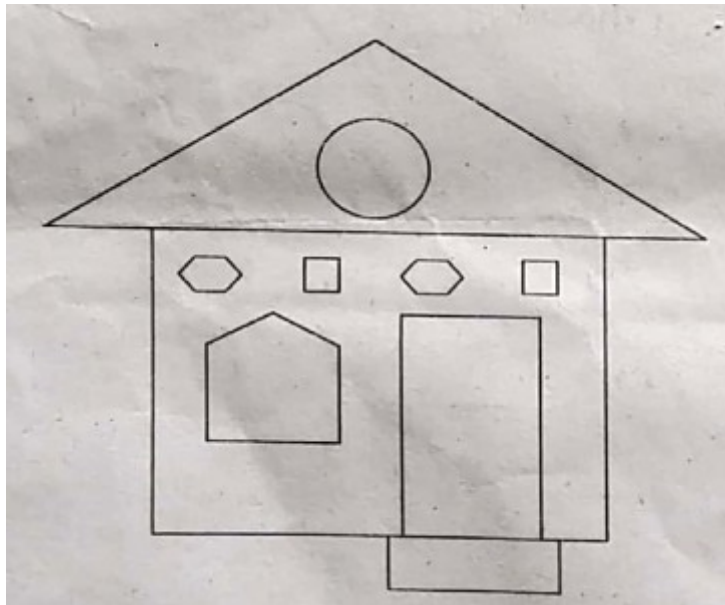
MERUVAMBAYI. M. U. P. SCHOOL
WORKSHEET – 2.5

2. When Lines Join

13/11/20
V Std



ACTIVITY 1



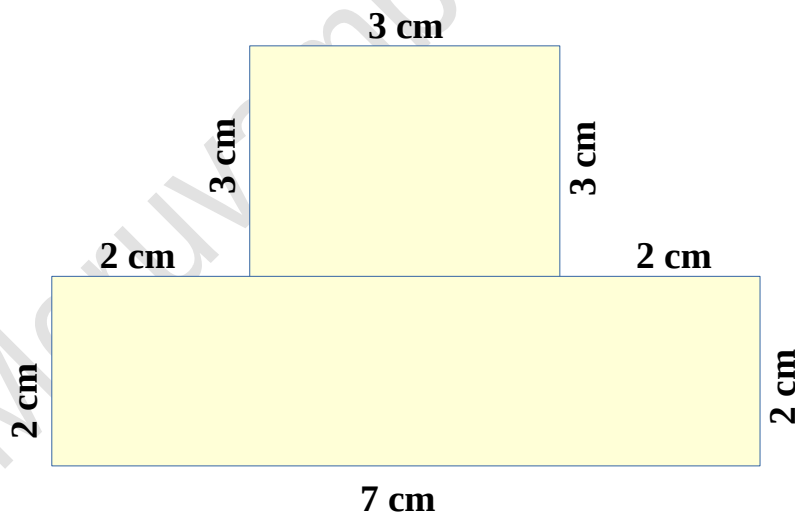
a. Write the name of the shapes used to draw this house.

.....
.....

b. Write the peculiarities of each shape.

<i>Shape</i>	<i>Peculiarities</i>
.....
.....
.....
.....
<i>Pentagon</i>	<i>5 sides</i>
.....


ACTIVITY 2



a. How many angles are there in the figure?

1. 8 2. 10 3. 6 4. 11

b. Draw the above picture using a ruler and a set square without changing the measurements.



Do all the activities and send to me dears....

All The Best