



MERUVAMBAYI. M. U. P. SCHOOL  
WORKSHEET – 2.1

## 2. When Lines Join

16/10/20  
V Std





Touch me to see the  
online class

# ACTIVITY 1

*Observe the pictures....*



*Find slanted and Upright images and enter their  
number.*

Upright:.....

slanted:.....

## ACTIVITY 2

### Four sides:

*Shown below are some figures with four sides (called quadrilaterals). In these, some sides go straight up from the bottom line; and some are at a slant. Look at the figures and complete this table.*



1



2



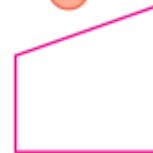
3



4



5



6



7



8

Figure	Upright	Slanted
1	Left line	Rightline
2		
3		
4		
5		Left line, right line
6		
7		
8		

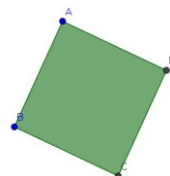
## Polygons



3 Sides

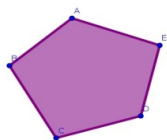
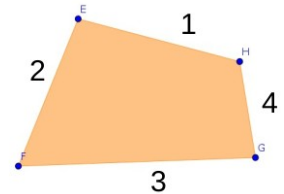


Triangle

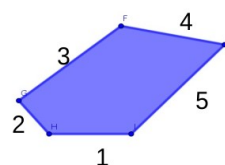


4 Sides

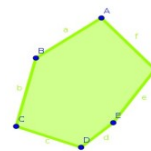
Quadrilateral



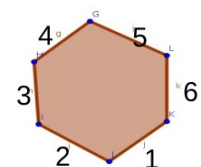
5 sides



Pentagon

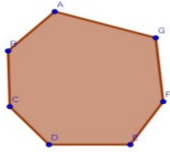


6 sides



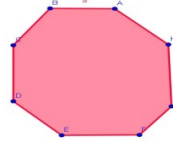
Hexagon

7 sides



Septagon

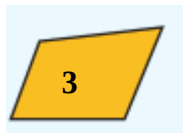
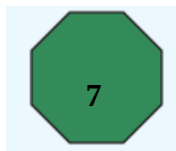
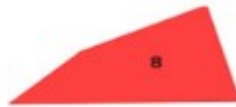
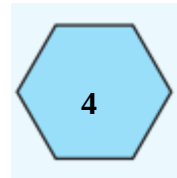


8 sides



Octagon

# ACTIVITY 3

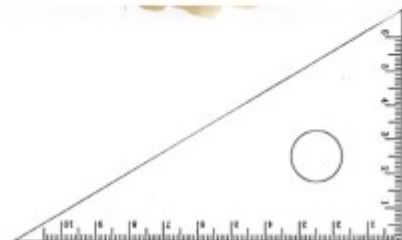
Classify the polygons



Number	Number of sides	Name
1	3	Triangle

## Set squares

The carpenter has a level instrument for cutting a rectangular piece of wood from a piece of wood. The level tool will help to make a side straight up from the other.



# ACTIVITY 4

*Draw quadrilaterals in your note book, and check the sides of these quadrilaterals go straight up from the bottom line by using set squares.*

*Watch the online class and note down the important points discussed there.*

*Do all the activities and send to me dears.....*

***All The Best***