
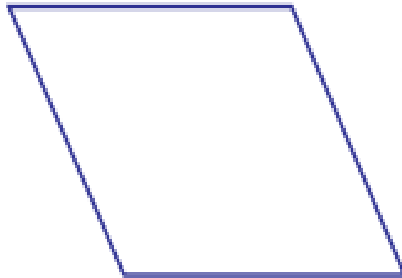
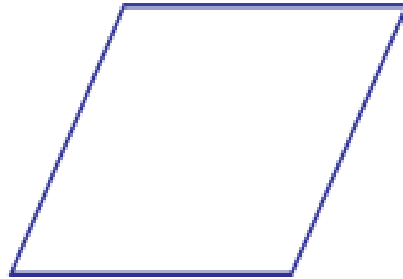
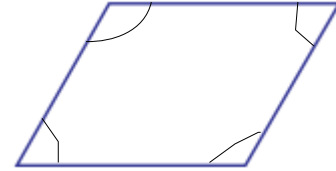


# *ANGLE FORMATION*

*All these are drawing using different angles of a set square*




*Two lines meeting at a point, form an angle*



*We can see that each of these figures have four angles*

*and the angles are different*

*Look at various angles in some of the letters*



*These letters are made using only straight lines*

*Some more letters made using angles are :*

F

W

X

Y

Z


*Find out the alphabets which have straight lines*



*Find out the alphabets which have slanted lines*



# *SPREAD AND ANGLES*



*Look at these pictures of clock*

*They show different times*

*The hands of a clock make an angle*

*Look at the gap between the hands in both clocks;*

*are they same ?*

*The hands of the second clock are spread more apart*

*That is the angle has increased a bit*

*The second clock shows 10:10*

*What happens when the time is 10:15 ?*

*The angle spreads more*