

Meruvambayi M UP School

Worksheet : Mathematics

Class : VII

Date : 26/08/2020





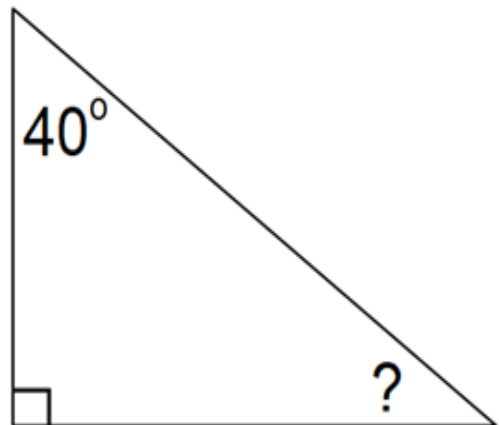
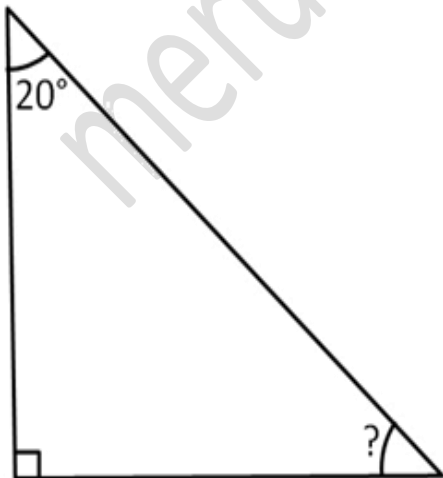
Online class link is here.....

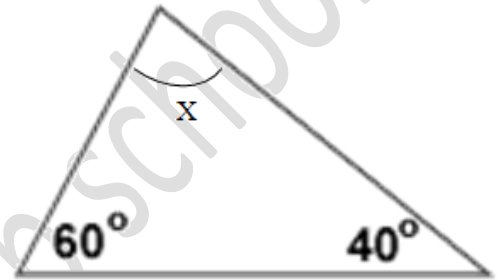
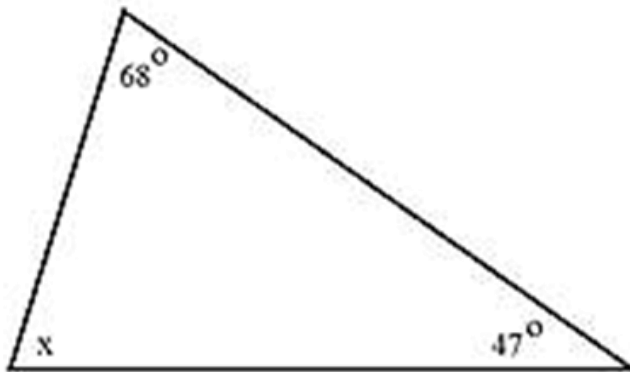
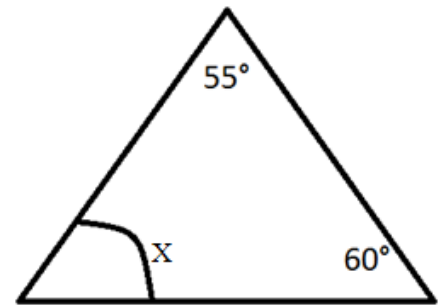
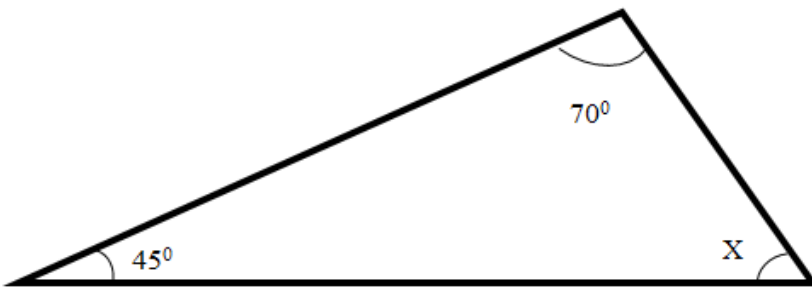


<https://www.youtube.com/watch?v=s2Lk0qxlBpc>

ACTIVITY 1

Find the value of ' x ' in the following triangles.





ACTIVITY 2

FIND THE SUM OF THE
THREE ANGLES OF EACH
TRIANGLE.

WHAT DO YOU NOTICE
ABOUT THE SUM OF THE
ANGLES IN EACH OF THE
TRIANGLES?

ENJOY THE WORKSHEET DEARS...

*DO ALL THE ACTIVITIES IN YOUR
MATH NOTE BOOK...*

*SEND ALL THE ACTIVITIES TO YOUR
TEACHER.....*

*All
the
Best*